

Year 9

EXPAND AND SIMPLIFY BRACKETS

Key Concepts

Expanding brackets

Multiply the number outside the brackets with EVERY term inside the brackets

Factoring expressions

Take the highest common factor outside the bracket.

Examples

Expand and simplify where appropriate

1) $7(3 + a) = 21 + 7a$

2) $2(5 + a) + 3(2 + a) = 10 + 2a + 6 + 3a + 16 = 5a$

3) Factorise $9x + 18 = 9(x + 2)$

4) Factorise $6e^2 - 3e = 3e(2e - 1)$



160, 161, 168, 189,
105, 106

Key Words

Expand
Factorise
Simplify

Questions

1) Expand and simplify

(a) $3(2 - 7f)$

(b) $5(m - 2) + 6$

(c) $3(4 + t) + 2(5 + t)$

2) Factorise

(a) $6m + 12t$

(b) $9t - 3p$

(c) $4d^2 -$

2d

Year 9

EXPANDING AND FACTORISING

Key Concepts

Expanding brackets

Where every term inside each bracket is multiplied by every term all other brackets.

Factorising expressions

Putting an expression back into brackets. To "factorise fully" means take out the HCF.

Difference of two squares

When two brackets are repeated with the exception of a sign change. All numbers in the original expression will be square numbers.

Examples

Expand and simplify:

$$\begin{array}{ll}
 1) & 4(m+5)+3 \\
 & = 4m+20+3 \\
 & = 4m+23 \\
 2) & (p+2)(2p-1) \\
 & = p^2+4p-p-2 \\
 & = p^2+3p-2 \\
 3) & (p+3)(p-1)(p+4) \\
 & = (p^2+3p-p-3)(p+4) \\
 & = (p^2+2p-3)(p+4) \\
 & = p^3+4p^2+2p^2+8p-3p-12 \\
 & = p^3+6p^2+5p-12
 \end{array}$$

Factorise fully:

$$\begin{array}{l}
 1) 16at^2 + 12at = 4at(4t + 3) \\
 2) x^2 - 2x - 3 = (x - 3)(x + 1) \\
 3) 6x^2 + 13x + 5 \\
 = 6x^2 + 3x + 10x + 5 \\
 = 3x(2x + 1) + 5(2x + 1) \\
 = (3x + 5)(2x + 1) \\
 4) 4x^2 - 25 \\
 = (2x + 5)(2x - 5)
 \end{array}$$

 hegartymaths
 160-166, 168,
 169, 223-228

Key Words

Expand
 Factorise fully
 Bracket
 Difference of
 two squares

A) Expand:

$$1) 5(m-2)+6 \quad 2) (5g-4)(2g+1) \quad 3) (y+1)(y-2)(y+3)$$

B) Factorise:

$$1) 5b^2c - 10bc \quad 2) x^2 - 8x + 15 \quad 3) 3x^2 + 8x + 4 \quad 4) 9x^2 - 25$$

Year 9

REARRANGE AND SOLVE EQUATIONS

Key Concepts

Solving equations:

Working with inverse operations to find the value of a variable.

Rearranging an equation:

Working with inverse operations to isolate a highlighted variable.

In solving and rearranging we **undo the operations** starting from the last one.

For each step in solving an equation we must do the **inverse** operation

Solve:

$$5(x - 3) = 20$$

Expand

$$5x - 15 = 20$$

+15

+15

$$5x = 35$$

÷5

÷5

$$x = 7$$

Solve:

$$12 = 3x - 18$$

+18

+18

$$30 = 3x$$

÷3

÷3

$$x = 10$$

Solve:

$$7p - 5 = 3p + 3$$

-3p

-3p

$$4p - 5 = 3$$

+5

+5

$$4p = 8$$

÷2

÷2

$$p = 2$$

Examples

Rearrange to make r the subject of the formulae :

$$Q = \frac{2r - 7}{3}$$

×3

×3

$$3Q = 2r - 7$$

+7

+7

$$3Q + 7 = 2r$$

÷2

÷2

$$\frac{3Q + 7}{2} = r$$

hegartymaths

177-186,

280-284, 287



Key Words

Solve
Rearrange
Term
Inverse
operation

1) Solve $7(x + 2) = 35$

2) Solve $4x - 12 = 28$

3) Solve $4x - 12 = 2x + 20$

4) Rearrange to make x the subject:

$$y = \frac{3x + 4}{2}$$

Year 9

EQUATIONS IN CONTEXT

Key Concepts

Algebra can be used to support us to find unknowns in a **contextual problem**.

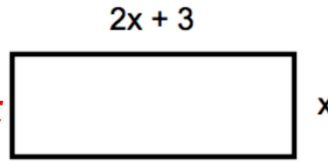
We can always apply a letter to an unknown quantity, to then **set up an equation**.

It will often be used in area and perimeter problems and angle problems in geometry.



Solve to find the value of x when the perimeter is 42cm.

HINT: Write on all of the lengths of the sides.



$2x + 3$

We know the perimeter is 42cm

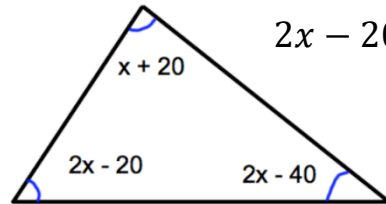
$$2x + 3 + 2x + 3 + x + x = 42$$

$$9x + 6 = 42$$

$$6x = 36$$

$$x = 6$$

Angles in a triangle sum to 180°



$$2x - 20 + x + 20 + 2x - 40 = 180$$

$$5x - 40 = 180$$

$$5x = 220$$

$$x = 45$$

Examples

Jane is 4 years older than Tom.

David is twice as old as Jane.

The sum of their ages is 60.

Using algebra, find the age of each person.

$$\text{Tom} = x \longrightarrow 12$$

$$\text{Jane} = x + 4 \longrightarrow 12 + 4 = 16$$

$$\text{David} = 2x + 8 \longrightarrow (2 \times 12) + 8 = 32$$

$$x + x + 4 + 2x + 8 = 60$$

$$4x + 12 = 60$$


$$4x = 48$$

$$x = 12$$

Key Words

Solve
Term
Inverse
operation

$3x + 5$



1) If the perimeter is 40cm. What is the length of the longest side?

2) Jane is 12 years older than Jack.

Sarah is 3 years younger than Jack.

The sum of their ages is 36.

Using algebra, find the age of each person.