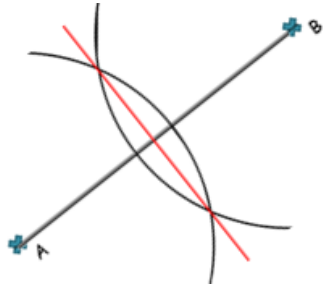


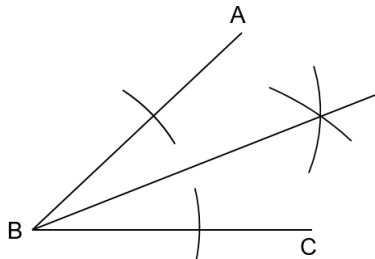
# CONSTRUCTIONS AND LOCI

## Key Concepts

Line bisector



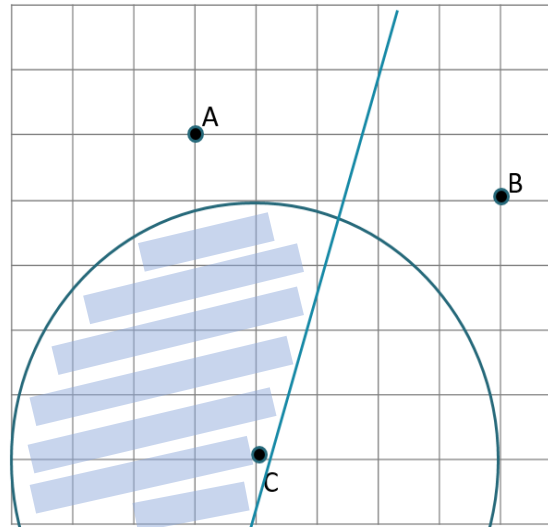
Angle bisector



 hegartymaths

683,660-665,  
674-679

## Examples



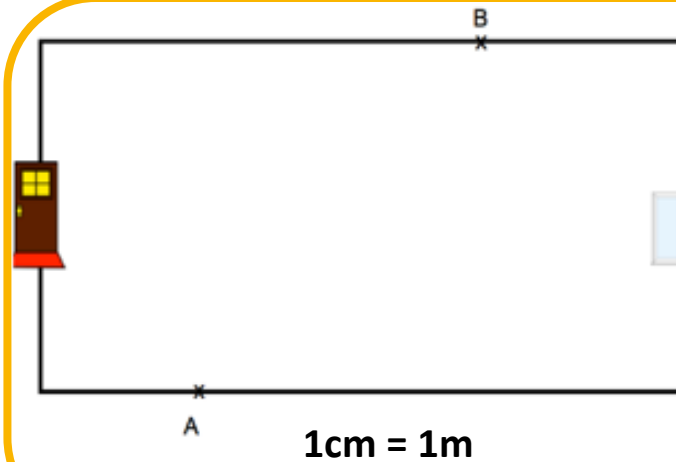
Shade the region that is:

- closer to A than B
- less than 4 cm from C

Line bisector  
of A and B

Circle with  
radius 4cm

**Key  
Words**  
Bisect  
Radius  
Region  
Shade



There are two burglar alarm sensors, one at A and one at B.

The range of each sensor is 4m.

The alarm is switched on.

Is it possible to walk from the front door to the patio door without setting off the alarm?